

41) Which of the following item is used for cleaning the floor?

- (a) Vacuum cleaner
- (b) Washing machine
- (c) Rice cooker
- (d) Blender

Answer (a)

42) You have to fetch your employer's child from school at 3.00pm. When must you leave the house if you need 25 minutes to walk to the school?

- (a) 2.35pm
- (b) 2.50pm
- (c) 2.55pm
- (d) 3.00pm

Answer (a)

43) You washed the bathroom from 10.30am to 11.00am. How much time did you take to wash the bathroom?




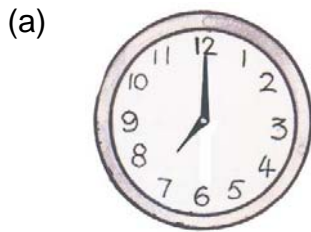
- (a) 30 minutes
- (b) 15 minutes
- (c) 11 minutes
- (d) 10 minutes

Answer (a)

44) You are given a time-table as follows:

Time	Duties
06.00am	Wake up
06.30am	Boil water, prepare breakfast
07.00am	Wake children, give them breakfast
07.30am	Take children to school bus
07.45am	Clean children's room
08.30am	Wash clothes
09.30am	Take a rest
10.00am	Clean "Sir/Madam's" room
10.30am	Wash toilets
11.00am	Prepare lunch

When must you take the children to the school bus?



Answer (b)



When does the child take his bath?

- (a) 7.30 in the morning
- (b) 12.00 noon
- (c) 4.15 in the afternoon
- (d) 7.30 in the evening

Answer (d)

46) Your employer daughter reaches home from school at 1.30pm. Her lunchtime is at 2.00pm. When must you start preparing for her lunch if you need one hour to prepare for lunch?

- (a) 2.00pm
- (b) 2.30pm
- (c) 1.00pm
- (d) 1.45pm

Answer (c)

Refer to the table below and answer questions 46 and 47.

47) The prices of fruits sold in the market are displayed in the table below.

Fruit	Price
2 apples	\$1.00
3 pears	\$1.00
5 oranges	\$1.00

How many oranges will you get for \$2.00?

- (a) 11 (b) 10 (c) 15 (d) 20

Answer (b)

48) How much change would you get if you pay \$10.00 to buy 4 apples?

- (a) \$2.00 (b) \$3.00 (c) \$9.00 (d) \$8.00

Answer (d)

49) What is the total amount shown below?



- (a) \$5.50 (b) \$7.10 (c) \$8.60 (d) \$9.50

Answer (b)

50) What is the total amount shown below?



(a) \$2.30

(b) \$2.90

(c) \$6.20

(d) \$16.00

Answer (b)